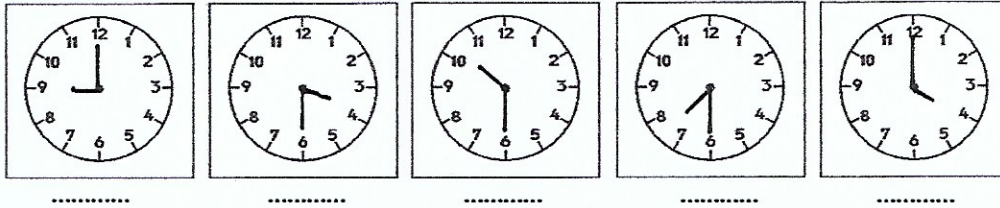
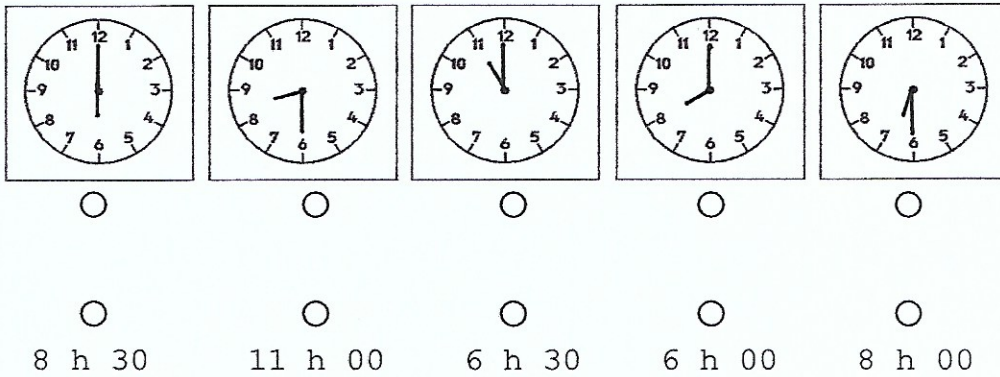


La mesure du temps : l'heure et la demi-heure

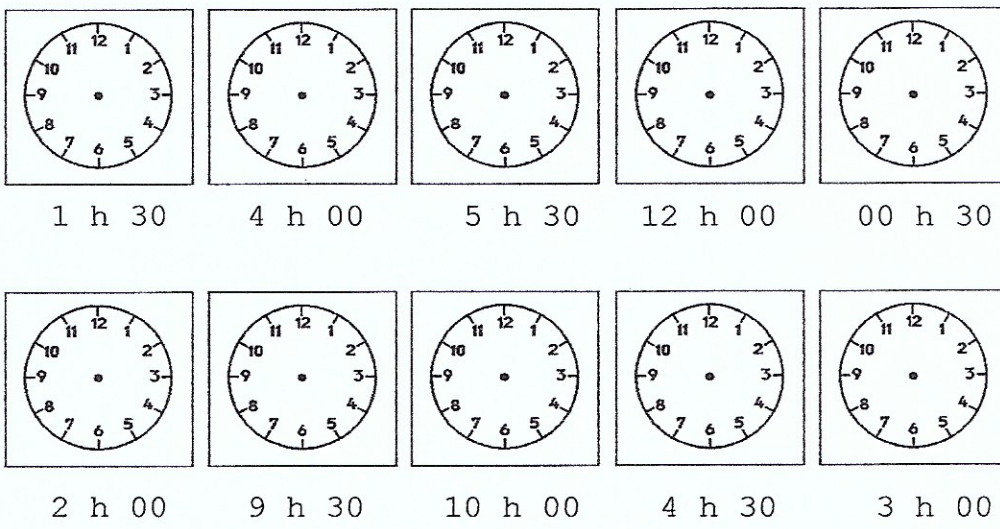
1. Inscris l'heure.



2. Relie l'horloge à la bonne heure.

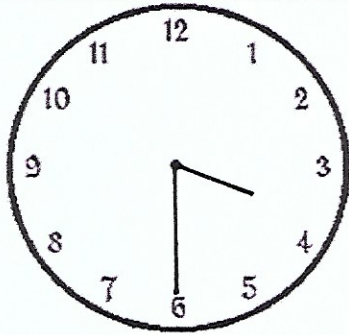
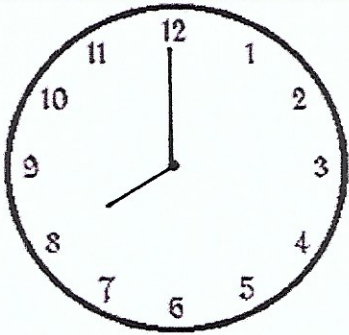
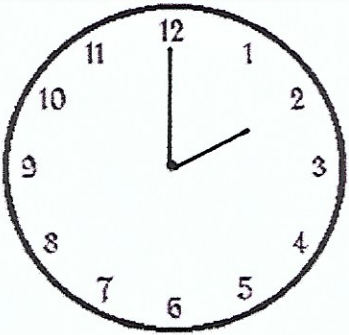
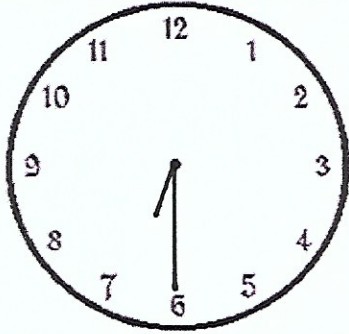
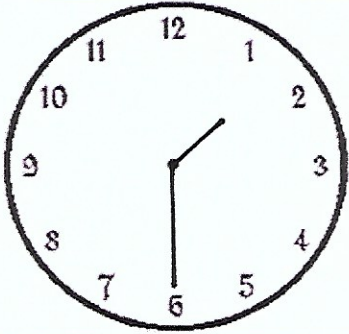
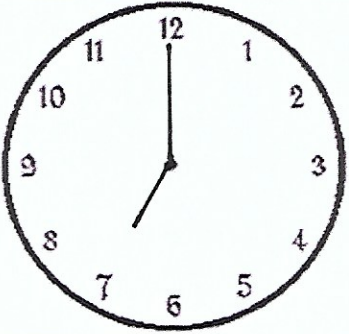
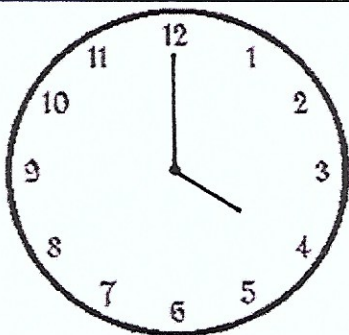
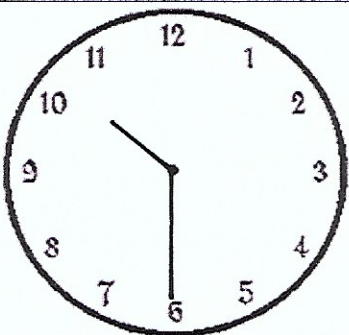
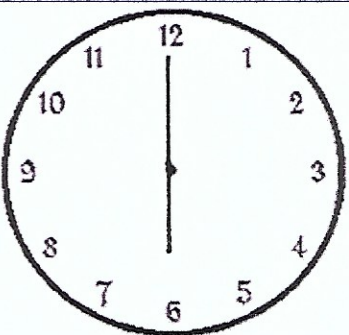


3. Dessine les aiguilles.



Je lis l'heure et la demi-heure

Colorie la ou les bonne(s) réponse(s)

		
<input type="radio"/> Il est 05 h 00	<input type="radio"/> Il est 08 h 30	<input type="radio"/> Il est 14 h 00
<input type="radio"/> Il est 03 h 30	<input type="radio"/> Il est 08 h 00	<input type="radio"/> Il est 14 h 30
<input type="radio"/> Il est 15 h 30	<input type="radio"/> Il est 01 h 00	<input type="radio"/> Il est 02 h 00
		
<input type="radio"/> Il est 06 h 30	<input type="radio"/> Il est 01 h 30	<input type="radio"/> Il est 09 h 00
<input type="radio"/> Il est 12 h 00	<input type="radio"/> Il est 13 h 00	<input type="radio"/> Il est 07 h 00
<input type="radio"/> Il est 12 h 30	<input type="radio"/> Il est 13 h 30	<input type="radio"/> Il est 08 h 00
		
<input type="radio"/> Il est 04 h 00	<input type="radio"/> Il est 10 h 30	<input type="radio"/> Il est 08 h 00
<input type="radio"/> Il est 05 h 00	<input type="radio"/> Il est 23 h 30	<input type="radio"/> Il est 18 h 00
<input type="radio"/> Il est 04 h 30	<input type="radio"/> Il est 22 h 30	<input type="radio"/> Il est 06 h 00