



Les fractions

- Entoure** le dessin qui représente la fraction demandée.

Quel choix représente le mieux $\frac{2}{3}$?



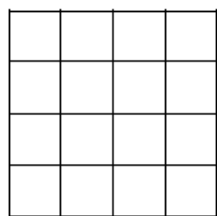
Quel choix représente le mieux $\frac{5}{8}$?



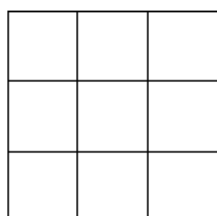
Quel choix représente le mieux $\frac{2}{6}$?



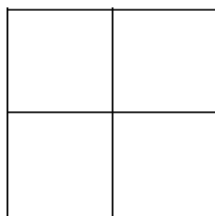
- Colorie** la fraction demandée. **Sers-toi** du quadrillage.




$\frac{1}{2}$




$\frac{2}{3}$



$\frac{3}{4}$

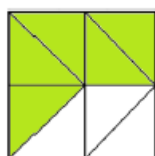


$\frac{7}{8}$



$\frac{2}{6}$

- Indique** la fraction correspondant à la partie coloriée.



.....

.....



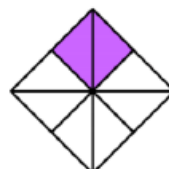
.....

.....



.....

.....



.....

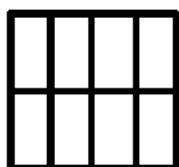
.....



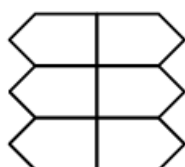
.....

.....


- Colorie** dans chaque figure la partie qui correspond à la fraction.



$\frac{2}{8}$



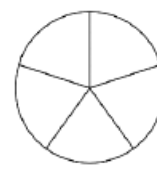
$\frac{1}{3}$



$\frac{3}{4}$


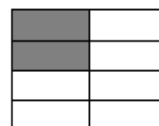
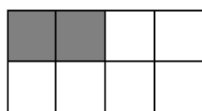



$\frac{6}{10}$



$\frac{5}{5}$

- **Entoure** toutes les représentations de la fraction $\frac{1}{4}$



- **Écris** les fractions en chiffres.

vingt-cinq centièmes \Rightarrow $\frac{\quad}{\quad}$

cinq quarts \Rightarrow $\frac{\quad}{\quad}$

quatre douzièmes \Rightarrow $\frac{\quad}{\quad}$

trois dixièmes \Rightarrow $\frac{\quad}{\quad}$

deux tiers \Rightarrow $\frac{\quad}{\quad}$

un demi \Rightarrow $\frac{\quad}{\quad}$

- **Écris** les fractions en lettres.

$\frac{2}{2} \Rightarrow$

$\frac{3}{4} \Rightarrow$

$\frac{3}{100} \Rightarrow$

$\frac{1}{3} \Rightarrow$

$\frac{9}{10} \Rightarrow$

$\frac{9}{7} \Rightarrow$